

**AUM SUN PUBLIC SCHOOL**  
**Holiday Homework (2026-2027)**  
**Holiday Homework**  
**Class 5<sup>th</sup>**

**SUBJECT - HINDI**

1. प्रतिदिन एक पेज सुलेख कीजिए।
2. प्रतिदिन 10 शब्दों की इमला अपने अभिभावक से लीजिए तथा गलत शब्दों का सुधार करके तीन बार लिखिए।
3. 'मेरी मां' व 'मेरा विद्यालय' पर आठ-आठ लाइन लिखिए।
4. पांच भारतीय त्योहारों के चित्र लगाकर उनके बारे में पांच-पांच लाइन लिखो।
5. विलोम शब्द लिखिए।

अपना, रात, उल्टा, बंद, देसी, खट्टा, माता, भाई, अंदर, अंबर।

**Send your work to this number: Section B - 8216923835 (Priyanka Mam)**  
**Section A (Mithlesh Mam) 9837168411**

**SUBJECT - ENGLISH**

1. Write 10 lines of cursive writing daily.
2. Read a newspaper daily and write five difficult words with their meanings.
3. Taking a break from studies once in a while is very important. It freshens up our body and mind. What is your favorite indoor hobby during holidays? Write a paragraph describing it.

**Send your work to this number:**  
**Shivangi Mam- 9650970803**

**SUBJECT - GRAMMAR**

Note - Do your holiday homework in separate notebook

1. Learn and write definition of sentence and its types and also give five example of each definition.
2. Make a chart on A4 sheet on the topic gender.
3. Form the abstract nouns by adding some suffixes

1-kind	2. Grow	3.liberate	4.Human
5. Punish	6. Declare	7.equal	8.operate
9. Move	10. Choose		

**Send this work to these numbers-**  
**Shivangi Mam- 9650970803**

## SUBJECT - MATHS

Q1. Write each of the following numbers in word using:

1. Indian system
  2. International system
- a. 321424519
  - b. 124512045
  - c. 93450001
  - d. 4000012

Q2. Write each of the following number in an expanded form:

1. 4,93,204
2. 4,00,56,041
3. 96,24,00,001
4. 86,00,41,430

Q3. Write the successor and predecessor of the following:

1. 25,40,40,900
2. 10,00,00,000
3. 46,01,00,799
4. 43,29,486

Q4. Arrange the following as ascending and descending order:

1. 2,322,435; 22,35,354; 45,766,213; 8,22,00,237
2. 85,48,741; 93,32,185; 2,24,30,433; 38,45,290

Q5. Round off the following numbers nearest 10, nearest 100, nearest 1000.

1. 43240
2. 768284
3. 2154300
4. 2154209

Q6. Write in Roman numerals:

- a. 250 b. 526 c. 1720 d. 2130

Q7. Find the difference the place value and face value of 5 in each of the following:

1. 54,70,16,000
2. 96,43,20,152

Activity: Write roman numerals 1 to 100 and circle odd number with green colour and circle even number with blue colour.

**Send your work to this number: 9266747060 (Prachi Mam)**

## SUBJECT - SOCIAL STUDIES

**Q.1 Write the maximum and minimum temperatures of daily with mentioning proper date and day. (NOTE: Do this work on A4 sheet)**

**Q.2 Fill in the blanks:-**

1. \_\_\_\_\_longitudes can be joined to form a circle.
2. A Globe is a \_\_\_\_\_dimensional model of the Earth.
3. Blue colour is used to depict \_\_\_\_\_on a map.
4. Revolution of the Earth causes \_\_\_\_\_.
5. \_\_\_\_\_days are there in a Leap year.
6. There are \_\_\_\_\_heat zone on the earth.
7. \_\_\_\_\_is the longest line of latitude.
8. The study of map-making is called \_\_\_\_\_.

**Q.2 Unscrambled Word:-**

1. The other name of Antarctic Ocean. ESROUHTN CEONA \_\_\_\_\_.
2. A network of parallel lines. DGIR \_\_\_\_\_.
3. The sea located to the east of India. YBA FO LBAEGN \_\_\_\_\_.
4. A book of Maps. SAATL \_\_\_\_\_.
5. Moisture present in the air. YHTUIMDI \_\_\_\_\_.

**Send your work to this number: 8279428522 ( KIRTI MA'AM)**

## **SUBJECT - DRAWING**

### **Worksheet 1**

- 1- Make flowers with the help of tissues and waste bottle caps.
- 2- Make wall hanging with the help of cardboard.

**Send your work to this number: 8851526021 ( Anushka Mam)**

## **SUBJECT - SCIENCE**

Note - Do this work in a separate notebook

Q1) Define the following terms.

- 1) Evaporation
- 2) Homogeneous Mixture
- 3) Microbes
- 4) Drying

Q2) A tap in the Kitchen is open and the water is being wasted. Why should we avoid this? Write 2 Harmful effects of wasting water.

Q3) Some foods have preservatives added to store them for a long time. Do you think this is safe? Give reason.

Q4) Draw diagrams of -

- 1) Water cycle
- 2) Human Digestive system


**Send your work on this number : Ms. Anchal Tyagi(9368716640)**

# Computer Worksheet

Name : \_\_\_\_\_ Date : \_\_\_\_\_






## Topic : Types of Computers

Label the name of computer type using the given cloud.



## The History Of Computers

### I. Match the early calculating devices(By drawing lines)

1. 	a. Tabulating machine
2. 	b. Napier Bones
3. 	c. Abacus
4. 	d. Analytical Engine
5. 	e. Difference Engine

Q.2. using pictures from news papers and magazines make a chart on primary and secondary storage device .

Send your work to this number: 7906751325 (Sheetal mam)

## **SUBJECT - G.K**

GK

Note- Do your holiday homework in separate notebook

1. Learn and write 10 current affairs daily.
2. Make a chart of top 10 Presidential residences.
3. Write down 20 points on yoga day.
4. Read daily International newspaper and paste 5 headlines in your separate notebook.

Send this work to these numbers

Sheetal mam(7906751325)